



Mathematics

Year 2

MARCH EXAMINATION 2021

1 hr 30 min

Additional Materials:

- Soft clean eraser
- Soft pencil (type B or HB recommended)

Read these instructions first

This paper contains 9 questions. Answer all questions in the spaces provided.

Do **not** use staples, paper clips, and glue or correction fluid.

Any rough working should be done in the rough work booklet provided.

NAME:

DATE:

SCORE:

TOTAL MARKS:

[Turn over]

1. Identify the place value of number 7 in the following numbers:

Ones, tens, hundreds, thousands.

a) 738 _____

b) 427 _____


c) 376 _____

d) 7654 _____

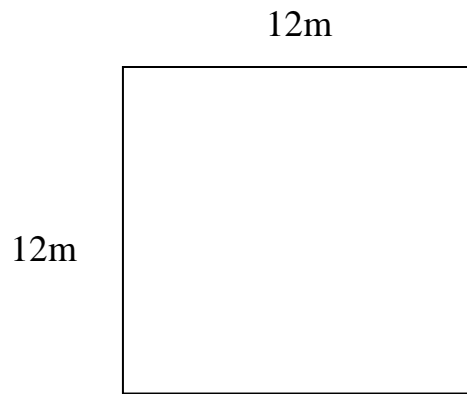
e) 7 _____

2. Find the perimeter of the following figures:

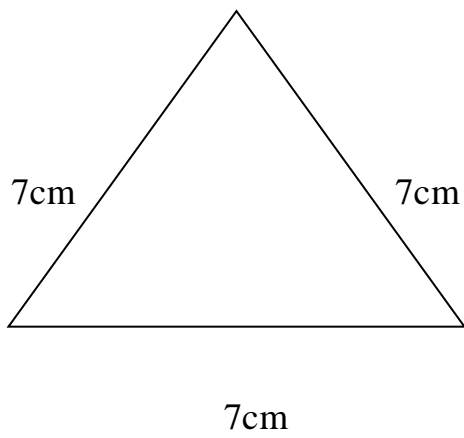
a)



b)



c)



3. Circle out the odd numbers in the list below:

100 325 77 56 43 96 45

56 79 49 104 77 82 1

4. Addition

$$\begin{array}{r} 2 \quad 3 \\ + 3 \quad 5 \\ \hline \end{array}$$

$$\begin{array}{r} 7 \quad 6 \quad 5 \\ + 9 \quad 6 \\ \hline \end{array}$$

c) $765 + 24 =$

d) $925 + 36 =$

5. Find the missing addends

a) $11 + \underline{\quad\quad\quad} = 33$

b) $25 + \underline{\quad\quad\quad} = 50$

c) $\underline{\quad\quad\quad} + 30 = 45$

d) $\underline{\quad\quad\quad} + 18 = 36$

e) $40 + \underline{\quad\quad\quad} = 60$

6. Subtraction.

a) $35 - 15 =$

b) $23 - 9 =$

c) $146 - 24 =$

d) $275 - 36 =$

e) $324 - 122 =$

f) $312 - 165 =$

7. Measurements

Draw lines that measure:

a) 5cm

b) 2.5 cm

c) 6cm

d) 10.5cm

8. Temperature.

Draw thermometers that show the following temperatures.

- a) 70 degrees Celsius
- b) 25 degree Celsius
- c) 18 degree Celsius
- d) 50 degree Celsius

9. Draw a clock showing the following times:

- a) 9:00 O'clock
- b) 11:15 O'clock
- c) 12: 45 O'clock
- d) 07:00 O'clock.