



Math

Year 2

**END OF JANUARY EXAMINATION**

**1h 30min**

Additional Materials:

- Soft clean eraser
- Soft pencil (type B or HB recommended)

*Read these instructions first*

This paper contains 5 questions. Answer all questions in the spaces provided.

Do **not** use staples, paper clips, and glue or correction fluid.

Any rough working should be done in the rough work booklet provided.

NAME: .....

DATE: .....

SCORE:

TOTAL MARKS:

[Turn over]

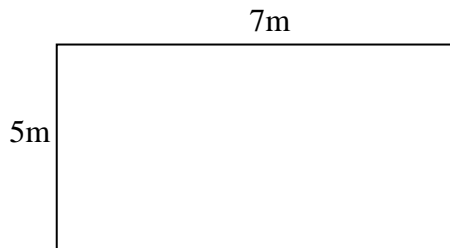
1. Identify the place value of number 7 in the following numbers:

Ones, tens, hundreds, thousands.

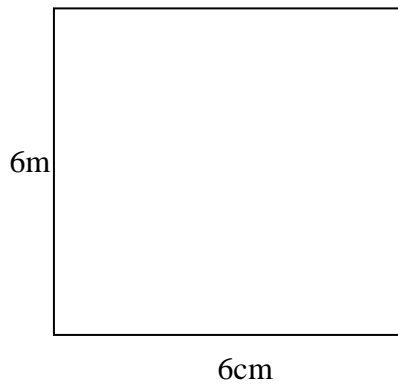
- a) 738
- b) 427
- c) 376
- d) 7654
- e) 7

2. Find the perimeter of the following figures:

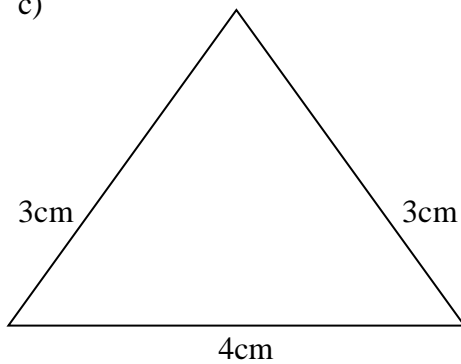
a)



b)



c)



3. Circle out the **odd numbers** in the list below:

100      325      77      56      43      96      45

56      79      49      104      77      82      1

4. Addition

a)

$$\begin{array}{r} 2 \quad 3 \\ + 3 \quad 5 \\ \hline \end{array}$$

b)

$$\begin{array}{r} 7 \quad 6 \quad 5 \\ + 9 \quad 6 \\ \hline \end{array}$$

c)  $765 + 24 =$

d)  $925 + 44 =$

e)  $234 + 453 =$

f)  $23 + 56 =$

**5. Subtraction.**

a)  $35 - 15 =$

b)  $23 - 9 =$

c)  $146 - 24 =$

d)  $275 - 36 =$

e)  $324 - 122 =$

f)  $312 - 165 =$