



Geography

Year 6

MARCH EXAMINATION 2021

1 hr. 30 min

Additional Materials:

- Soft clean eraser
- Soft pencil (type B or HB recommended)

Read these instructions first

This paper contains 17 questions. Answer all questions in the spaces provided.

Do **not** use staples, paper clips, and glue or correction fluid.

Any rough working should be done in the rough work booklet provided.

NAME:

DATE:

SCORE:

TOTAL MARKS:

[Turn over]

1. What is the water cycle? (5)

.....
.....
.....
.....
.....
.....

2. Define the following terms: (6)

i. Condensation

.....
.....

ii. Evaporation

.....
.....

iii. Precipitation

.....
.....

3. Define the following terms in relation to Rivers (4)

i. Erosion

.....
.....

ii. River Valley

.....
.....

iii. Floodplain

.....
.....

4. Using diagrams describe the changes in shape of the river valley in the different river courses. (6)

5. The longest river in the world is _____ and it crosses three countries one being _____ its main tributaries being the _____ and _____.

(4)

6. Write four important uses of the River Nile... (4)

.....
.....

.....

.....

7. How is acid rain formed? (1)

.....

.....

8. Give 4 negative effects resulting from pollution of rivers. (4)

.....

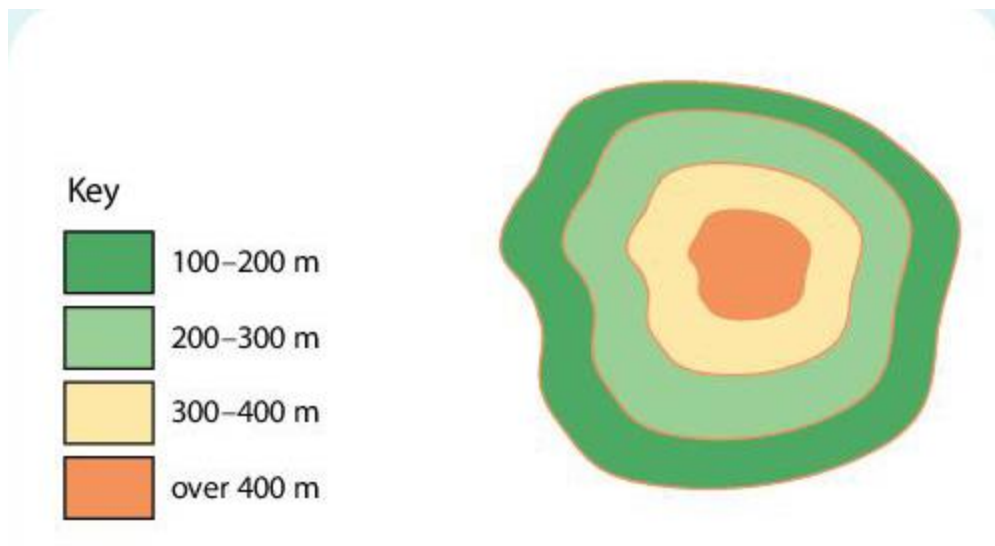
.....

9. Differentiate between a relief map and a topographical map. (2)

.....

.....

10.



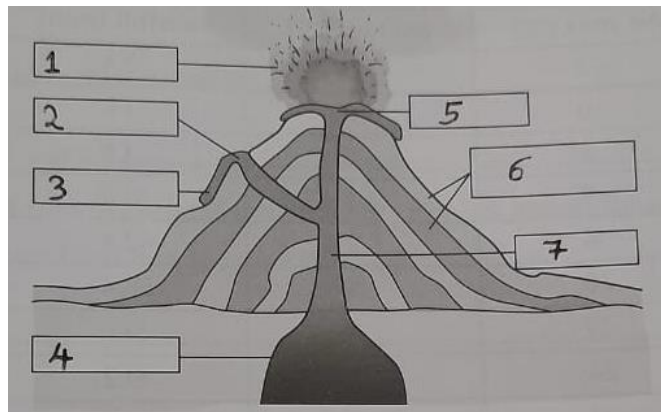
What kind of map is this? (1)

11. What is the function of contour lines on a map? (1)

.....

.....

12. Label parts of the volcanic mountain shown below. (7)



13. Apart from Volcanic mountains name two other types of mountains and draw diagrams (6)

14. What is weathering and give an example of what causes or how weathering occurs. (2)

.....

.....

15. The tallest mountain in the world is Mt. _____ and it is among the _____ mountain ranges. (2)

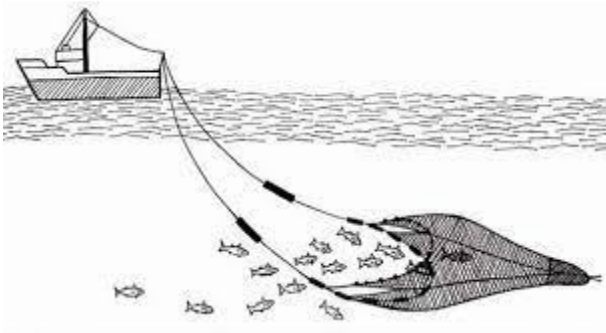
16. Differentiate between a coast and a coast line. (2)

.....

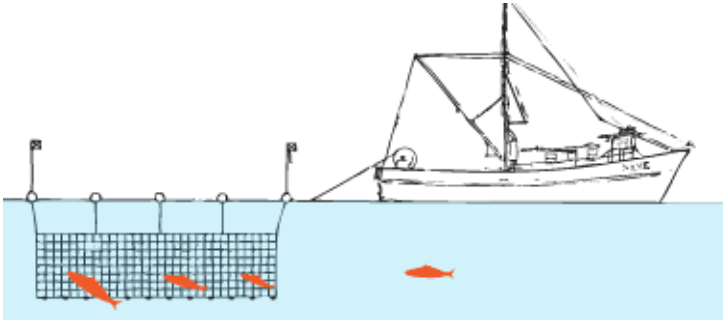
.....

17. Label the methods of fishing in the diagrams below (4)

i.



ii.



iii.

